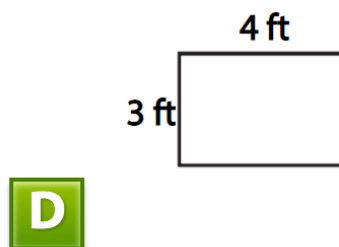
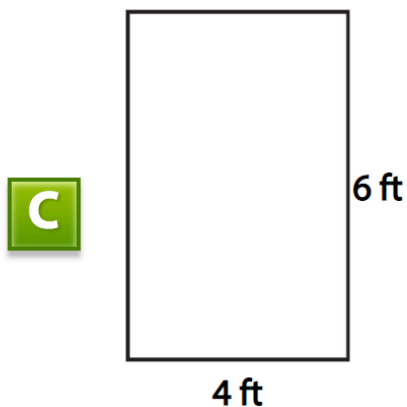
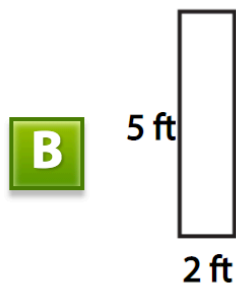
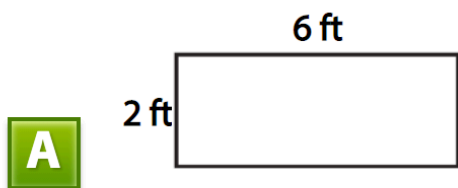


Which rectangle(s) has/have a perimeter of 14 feet?

Select all that apply.



Mr. Butler posts his students' artwork on a bulletin board.



Area = 30 square feet

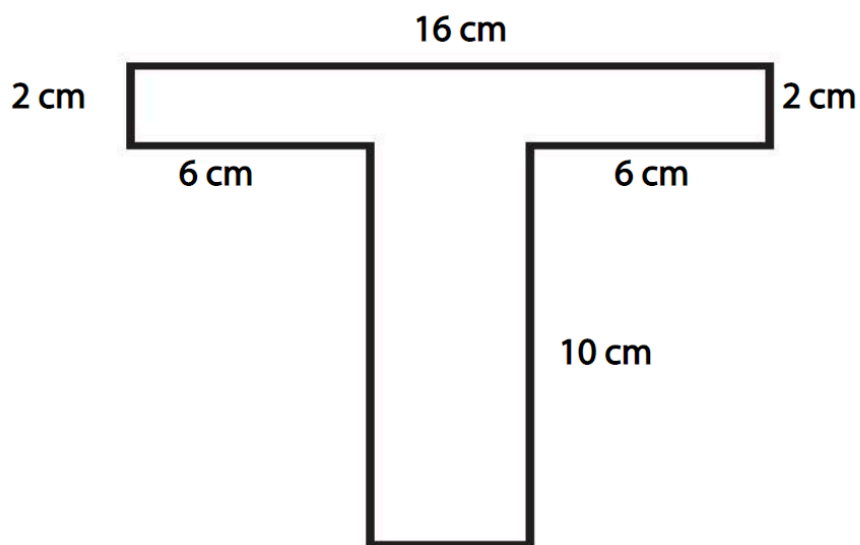
The width and length of the bulletin board are whole numbers.

What is the width of the bulletin board if the length is 5 feet?

The width of the bulletin board is feet.

Tricia is cutting her initial from a piece of felt.

Select the products that can be added to find the number of square centimeters of felt Tricia needs.



A 2×16 and 10×4

B 4×10 and 2×6 and 2×6

C 6×10 and 4×16